



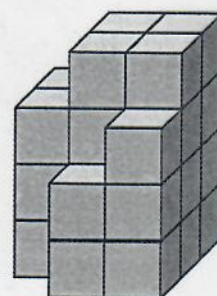
1 Maike hat mit Würfeln gebaut. Aus wie vielen Würfeln bestehen die Würfelbauten?



_____ Würfel




_____ Würfel




_____ Würfel

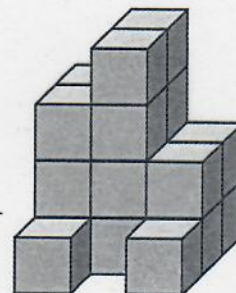
2 Welcher Bauplan gehört zu dem Würfelbau? Verbinde.



3	5	2
5	2	
5	2	


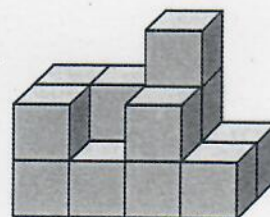






3	4	2
3	4	2
1		1



4	4	3	2
4	4	2	2
4	4	2	2

3 Schreibe zu den Würfelbauten einen Bauplan.



4 Du hast 10 Würfeln. Baue damit 4 verschiedene Würfelbauten. Schreibe die Baupläne dazu.

